


Nome : _____

INFORMAÇÃO :


Data : ___/___/___

1 – Conta e completa.




C	D	U

_____ + _____ = _____




C	D	U

_____ + _____ = _____




C	D	U

_____ + _____ = _____



C	D	U

_____ + _____ = _____



C	D	U

_____ + _____ = _____

2 – Completa.

$100 + 50 + \underline{\quad} = 200$

$140 + 50 + \underline{\quad} = 200$

$220 + 40 + 20 + \underline{\quad} = 300$

$10 + 230 + 10 + \underline{\quad} = 300$

$100 - 50 + \underline{\quad} = 200$

$160 - 30 + \underline{\quad} = 200$

$250 - 40 + 20 + \underline{\quad} = 300$

$60 + 230 + 40 - \underline{\quad} = 300$