


Nome : _____

INFORMAÇÃO : _____

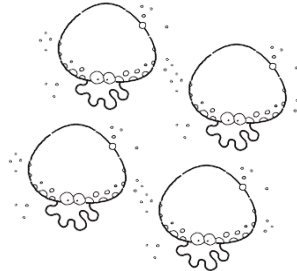
Data : ____/____/____




Conta e completa.



e



e



e



e




Completa.



1

e



2

são



3

e



1

são



3

e




2

são



Pinta os objectos de acordo com as quantidades indicadas.

5



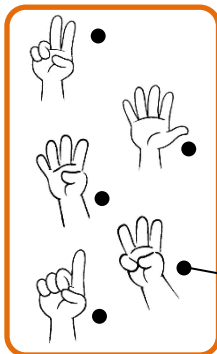
3



4



Observa o exemplo. Liga correctamente.




- cinco •
- um •
- três •
- quatro •
- dois •

- 1
- 2
- 3
- 4
- 5



Desenha tantas flores quantas as árvores.




Completa com os sinais <, > ou =.



1 2



3 3



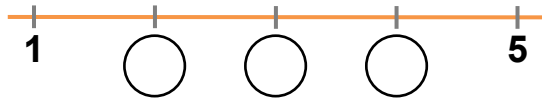
5 4






2 3



Escreve os números que faltam na recta numérica.



Observa as imagens. Completa as igualdades.



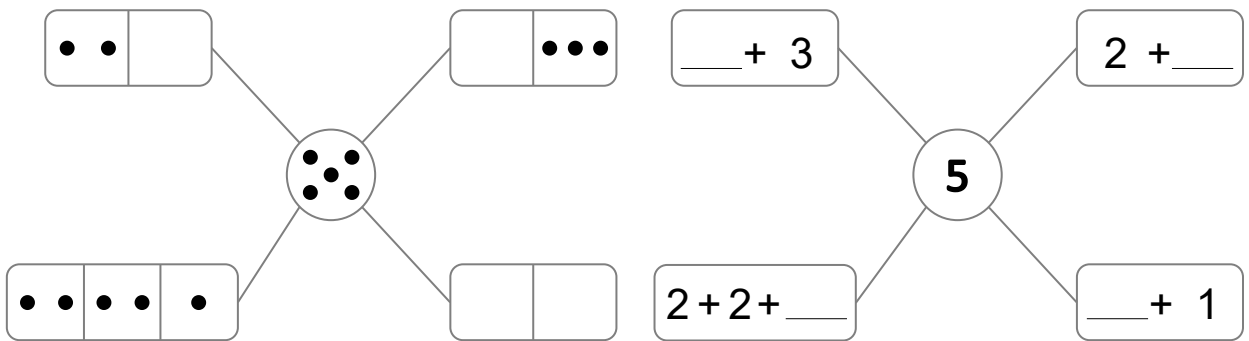
$3 + 1 = \square$

$\square + \square = \square$



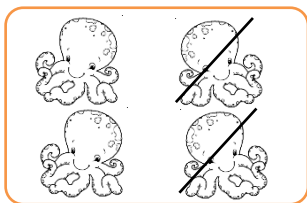
$\square + \square = \square$



Completa os esquemas.



Observa as imagens. Completa as igualdades.



$4 - 2 = \square$

$3 - \square = \square$

$\square - 1 = \square$