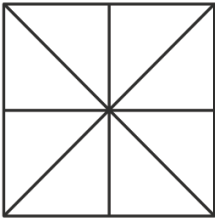


Nome : _____


INFORMAÇÃO : _____

Data : ___/___/___


1 – Tomando por unidade o quadrado pinta em cada figura o correspondente à fração indicada.



$$\frac{3}{8}$$

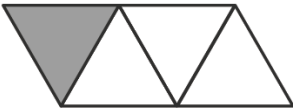


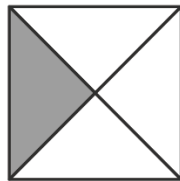
$$\frac{2}{3}$$

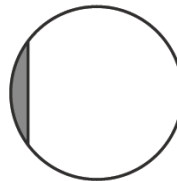



$$\frac{1}{4}$$

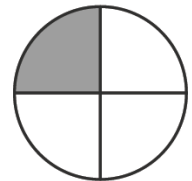
2 – Em que figuras estão pintados $\frac{1}{4}$ da figura? Assinala com X.



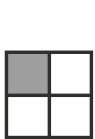








3 – Sabendo que cada figura representa a unidade e que está dividida em partes iguais que fração representa a parte pintada?

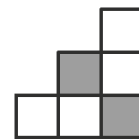


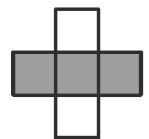












4 – Desenha e pinta figuras que representem as frações seguintes:

$$\frac{2}{4}$$

$$\frac{6}{10}$$

$$\frac{3}{9}$$