

Nome : \_\_\_\_\_

INFORMAÇÃO : \_\_\_\_\_


Data : \_\_\_/\_\_\_/\_\_\_



Observa e completa.




$2 + 3 = \square$



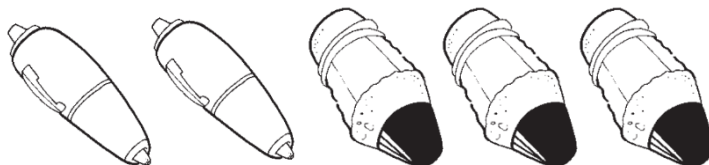
$2 + 2 = \square$



$\square + 2 = 5$



$3 + 1 = \square$



$2 + \square = 5$



Escreve os algarismos por ordem crescente.

3 5 1

\_\_\_ < \_\_\_ < \_\_\_

4 2 3

\_\_\_ < \_\_\_ < \_\_\_



Escreve os algarismos por ordem decrescente.

3 5 2 4 1

\_\_\_ > \_\_\_ > \_\_\_ > \_\_\_ > \_\_\_