
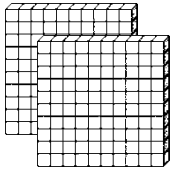


Nome : _____


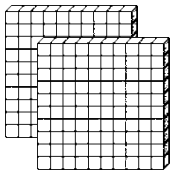
INFORMAÇÃO :

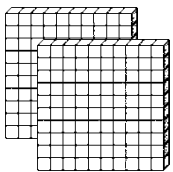
Data : ___/___/___

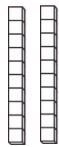
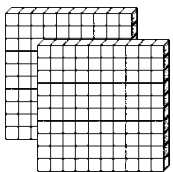
1 – Completa.


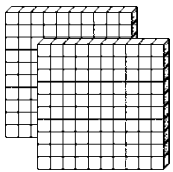


___ centenas, ___ dezenas e ___ unidades
duzentos e _____ e _____









2 – Decomposição e completa de acordo com o exemplo.

258 = 200 + 50 + 8 = 2 centenas + 5 dezenas + 8 unidades
duzentos e cinquenta e oito

242 = ___ + ___ + ___ = ___ centenas + ___ dezenas + ___ unidades

179 = ___ + ___ + ___ = _____ + _____ + _____

205 = ___ + ___ + ___ = _____ + _____ + _____

299 = ___ + ___ + ___ = _____ + _____ + _____
